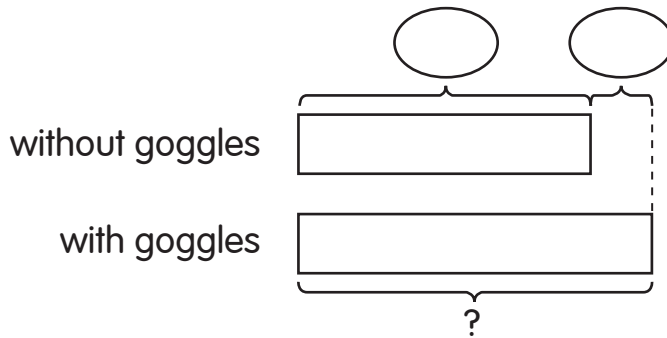


# Practice 3 Comparing Two Sets

Solve.


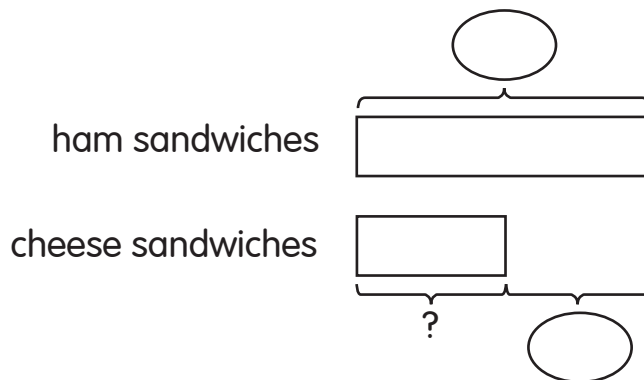
Complete the bar models to help you.

- 102 children at a swimming pool do not wear goggles.  
23 more children wear goggles than those who do not wear goggles.  
How many children wear goggles?



\_\_\_\_\_ children wear goggles.

- Alice made 166 ham sandwiches for a party.  
She made 77 fewer cheese sandwiches than ham sandwiches for the party.  
How many cheese sandwiches did Alice make?



Alice made \_\_\_\_\_ cheese sandwiches.

**Solve.**

**Draw bar models to help you.**

- 3.** Sam makes 123 party favors.  
Lily makes 87 more party favors than Sam.  
How many party favors does Lily make?

Lily makes \_\_\_\_\_ party favors.

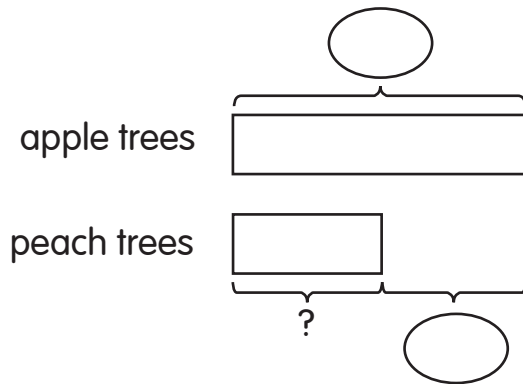
- 4.** 952 children watch a funny movie.  
265 fewer adults than children watch the funny movie.  
How many adults watch the funny movie?

\_\_\_\_\_ adults watch the funny movie.

**Solve.**

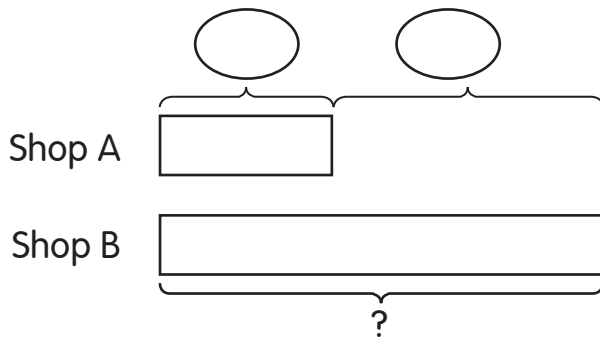
**Complete the bar models to help you.**

5. Mr. Diaz has 347 apple trees in his orchard.  
 He has 162 more apple trees than peach trees in his orchard.  
 How many peach trees does Mr. Diaz have in his orchard?



Mr. Diaz has \_\_\_\_\_ peach trees in his orchard.

6. Shop A sells 97 television sets in December.  
 It sells 166 fewer television sets than Shop B in December.  
 How many television sets does Shop B sell in December?




Shop B sells \_\_\_\_\_ television sets in December.

**Solve.**

**Draw bar models to help you.**

7. The school cook orders 219 hamburgers.  
He orders 120 more hamburgers than hot dogs.  
How many hot dogs does the school cook order?



The school cook orders \_\_\_\_\_ hot dogs.

8. 234 flag twirlers march in the Fourth of July parade.  
There are 159 fewer flag twirlers than band members at the parade.  
How many band members are at the parade?

\_\_\_\_\_ band members are at the parade.