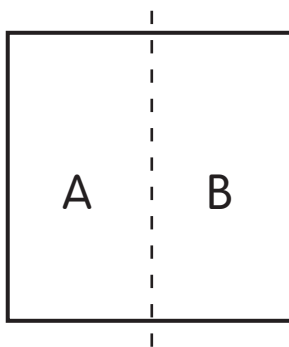


Practice 2 Exploring Plane Shapes

Read.

Then answer the questions.

1. Josh has a square piece of paper.
He folds it and unfolds it.
Then he draws a line along the fold.
Now he has two new shapes, A and B.



Write *yes* or *no*.

- a. Are Shape A and Shape B the same shape? _____
- b. Are Shape A and Shape B the same size? _____

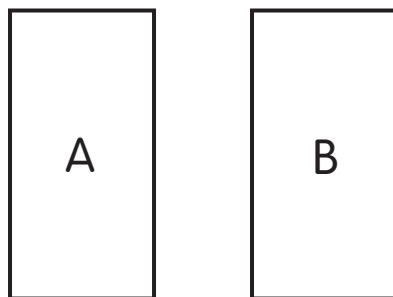
Count.

- c. How many sides are there?
Shape A _____ Shape B _____
- d. How many corners are there?
Shape A _____ Shape B _____

Write *yes* or *no*.

e. Are Shape A and Shape B different? _____

Josh then cuts out Shape A and Shape B.

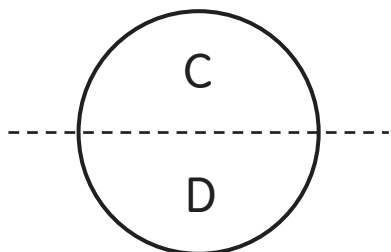


f. Can Shape A fit exactly over Shape B? _____

Are the shapes the same shape and size?

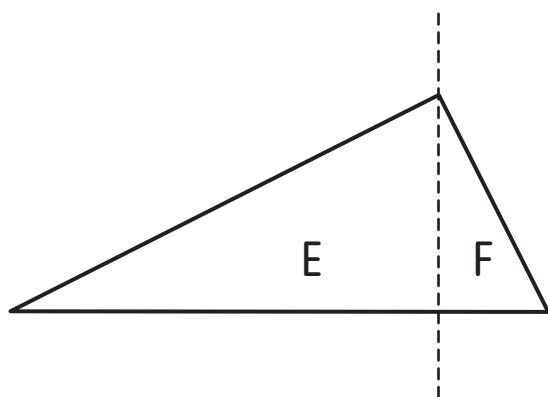
Write *yes* or *no*.

2.



Shapes C and D _____

3.



Shapes E and F _____