

# Practice 6 Addition with Regrouping in Tens

Add and regroup the tens.

1.  $534 + 283 = ?$

Add the ones.

4 ones + 3 ones = \_\_\_\_\_ ones

Add and regroup the tens.

3 tens + 8 tens = \_\_\_\_\_ tens

= \_\_\_\_\_ hundred \_\_\_\_\_ ten

Add the hundreds.

1 hundred + 5 hundreds + 2 hundreds = \_\_\_\_\_ hundreds

$534 + 283 =$  \_\_\_\_\_

Write  $534 + 283$  this way.

5	3	4
+	2	8 3
_____		

Then add.

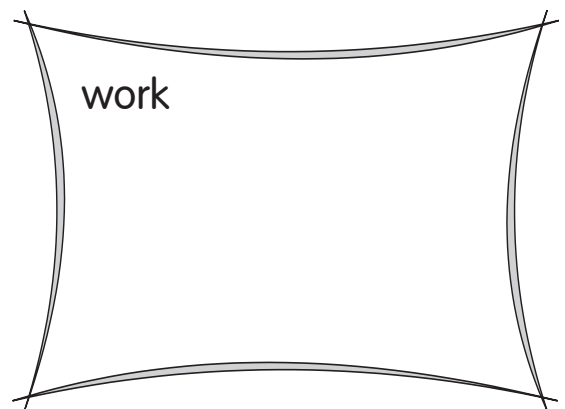
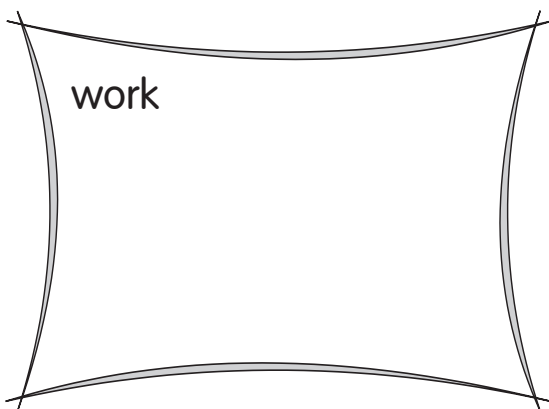


2. 
$$\begin{array}{r} 462 \\ + 175 \\ \hline \end{array}$$

3. 
$$\begin{array}{r} 648 \\ + 161 \\ \hline \end{array}$$




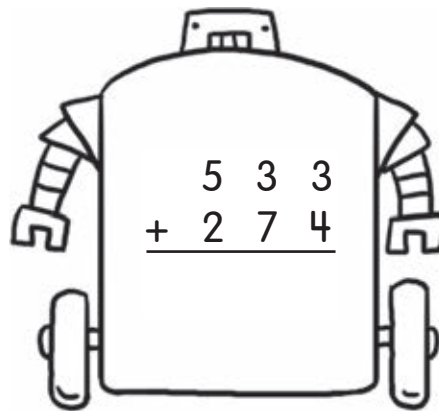




4.  $295 + 633 =$  \_\_\_\_\_

5.  $462 + 456 =$  \_\_\_\_\_



# Add.

6.



Kim lost her robots.  
Her robots have the same answer.  
To help her find her robots, color the robots with the same answer.